

Forces and Equilibrium 2

Q1.

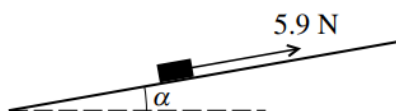


Fig. 1

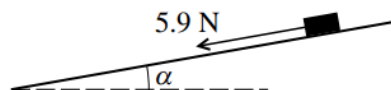
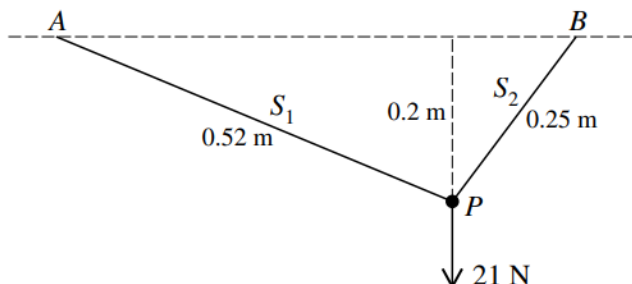


Fig. 2

A block of weight 6.1 N is at rest on a plane inclined at angle α to the horizontal, where $\tan \alpha = \frac{11}{60}$. The coefficient of friction between the block and the plane is μ . A force of magnitude 5.9 N acting parallel to a line of greatest slope is applied to the block.

- (i) When the force acts up the plane (see Fig. 1) the block remains at rest. Show that $\mu \geq \frac{4}{5}$. [5]
- (ii) When the force acts down the plane (see Fig. 2) the block slides downwards. Show that $\mu < \frac{7}{6}$. [2]
- (iii) Given that the acceleration of the block is 1.7 m s^{-2} when the force acts down the plane, find the value of μ . [2]

Q2.



A particle P of weight 21 N is attached to one end of each of two light inextensible strings, S_1 and S_2 , of lengths 0.52 m and 0.25 m respectively. The other end of S_1 is attached to a fixed point A , and the other end of S_2 is attached to a fixed point B at the same horizontal level as A . The particle P hangs in equilibrium at a point 0.2 m below the level of AB with both strings taut (see diagram). Find the tension in S_1 and the tension in S_2 . [6]

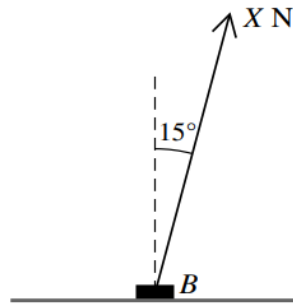
Q3.

A rough plane is inclined at an angle of α° to the horizontal. A particle of mass 0.25 kg is in equilibrium on the plane. The normal reaction force acting on the particle has magnitude 2.4 N. Find

- (i) the value of α , [2]
- (ii) the least possible value of the coefficient of friction. [2]

Forces and Equilibrium 2

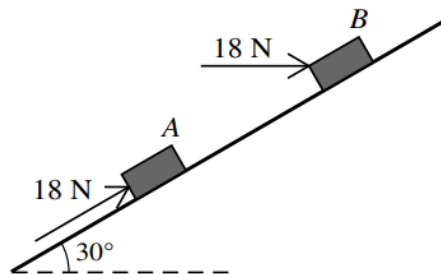
Q4.



A block B of mass 7 kg is at rest on rough horizontal ground. A force of magnitude $X\text{ N}$ acts on B at an angle of 15° to the upward vertical (see diagram).

- (i) Given that B is in equilibrium find, in terms of X , the normal component of the force exerted on B by the ground. [2]
- (ii) The coefficient of friction between B and the ground is 0.4 . Find the value of X for which B is in limiting equilibrium. [3]
-

Q5.



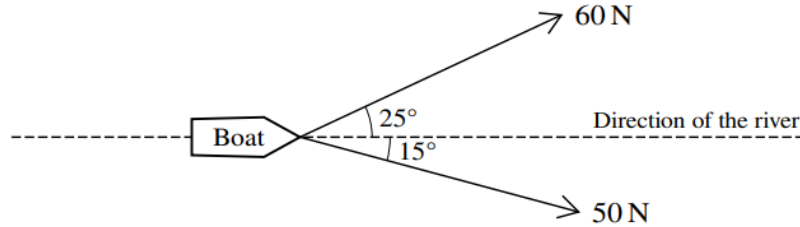
Small blocks A and B are held at rest on a smooth plane inclined at 30° to the horizontal. Each is held in equilibrium by a force of magnitude 18 N . The force on A acts upwards parallel to a line of greatest slope of the plane, and the force on B acts horizontally in the vertical plane containing a line of greatest slope (see diagram). Find the weight of A and the weight of B . [4]

Q6.

A particle of mass 15 kg is stationary on a rough plane inclined at an angle of 20° to the horizontal. The coefficient of friction between the particle and the plane is 0.2 . A force of magnitude $X\text{ N}$ acting parallel to a line of greatest slope of the plane is used to keep the particle in equilibrium. Show that the least possible value of X is 23.1 , correct to 3 significant figures, and find the greatest possible value of X . [7]

Forces and Equilibrium 2

Q7.



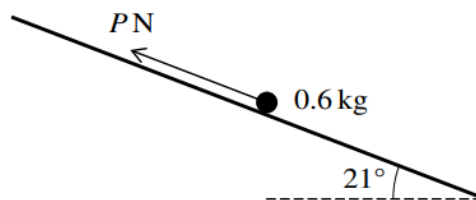
A boat is being pulled along a river by two people. One of the people walks along a path on one side of the river and the other person walks along a path on the opposite side of the river. The first person exerts a horizontal force of 60 N at an angle of 25° to the direction of the river. The second person exerts a horizontal force of 50 N at an angle of 15° to the direction of the river (see diagram).

- (i) Find the total force exerted by the two people in the direction of the river. [2]
- (ii) Find the magnitude and direction of the resultant force exerted by the two people. [4]
-

Q8.

A particle of mass m kg is resting on a rough plane inclined at 30° to the horizontal. A force of magnitude 10 N applied to the particle up a line of greatest slope of the plane is just sufficient to stop the particle sliding down the plane. When a force of 75 N is applied to the particle up a line of greatest slope of the plane, the particle is on the point of sliding up the plane. Find m and the coefficient of friction between the particle and the plane. [6]

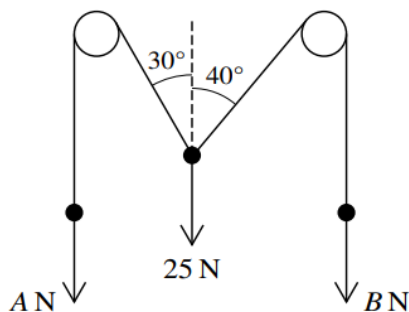
Q9.



A particle of mass 0.6 kg is placed on a rough plane which is inclined at an angle of 21° to the horizontal. The particle is kept in equilibrium by a force of magnitude P N acting parallel to a line of greatest slope of the plane, as shown in the diagram. The coefficient of friction between the particle and the plane is 0.3. Show that the least possible value of P is 0.470, correct to 3 significant figures, and find the greatest possible value of P . [6]

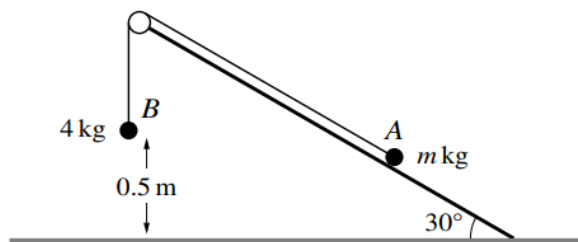
Forces and Equilibrium 2

Q10.



Two light inextensible strings are attached to a particle of weight 25 N. The strings pass over two smooth fixed pulleys and have particles of weights A N and B N hanging vertically at their ends. The sloping parts of the strings make angles of 30° and 40° respectively with the vertical (see diagram). The system is in equilibrium. Find the values of A and B . [6]

Q11.



Two particles A and B of masses m kg and 4 kg respectively are connected by a light inextensible string that passes over a fixed smooth pulley. Particle A is on a rough fixed slope which is at an angle of 30° to the horizontal ground. Particle B hangs vertically below the pulley and is 0.5 m above the ground (see diagram). The coefficient of friction between the slope and particle A is 0.2.

- (i) In the case where the system is in equilibrium with particle A on the point of moving directly up the slope, show that $m = 5.94$, correct to 3 significant figures. [6]